

Northoaks Primary School

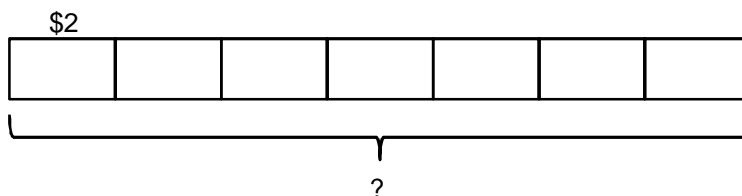
Primary 3 Mathematics Workshop for Parents

19 April 2018
(Thursday)



Question 1a

Let's Discuss!

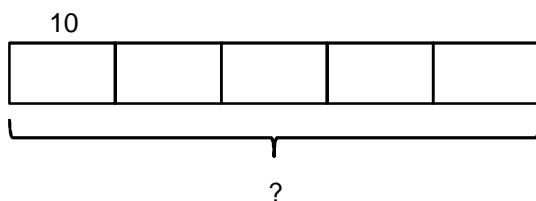


$$7 \times \$2 = \$14$$

Paul spent \$14 altogether.

Question 1b

Let's
LEARN

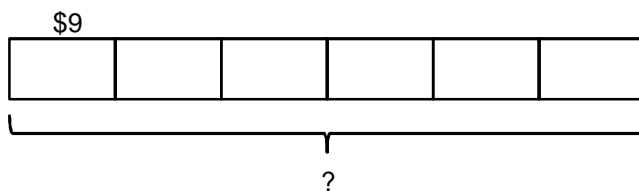


$$5 \times 10 = 50$$

He bought 50 sweets in all.

Question 1c

Your Turn !

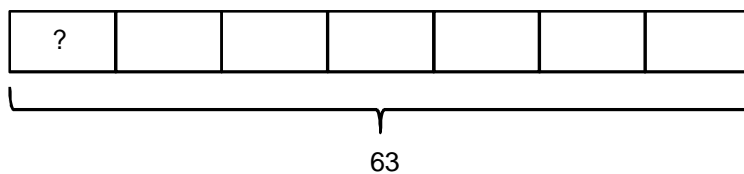


$$6 \times \$9 = \$54$$

Sara spent \$54.

Question 2a

Let's Discuss !

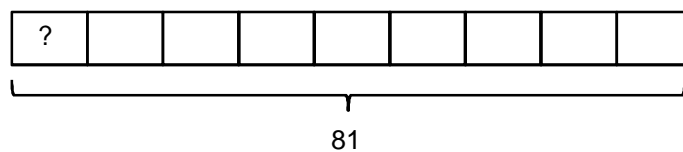


$$63 \div 7 = 9$$

He packed 9 eggs in each box.

Question 2b

Let's
LEARN

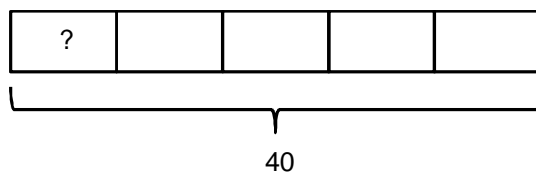


$$81 \div 9 = 9$$

There are 9 marbles in each container.

Question 2c

Your Turn !

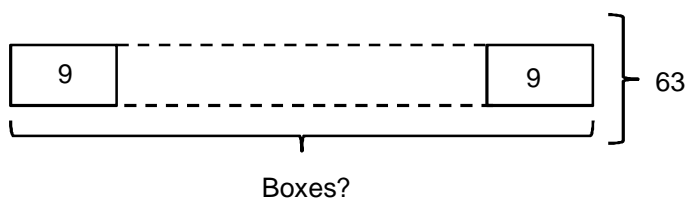


$$40 \div 5 = 8$$

There are 8 pupils in each group.

Question 3a

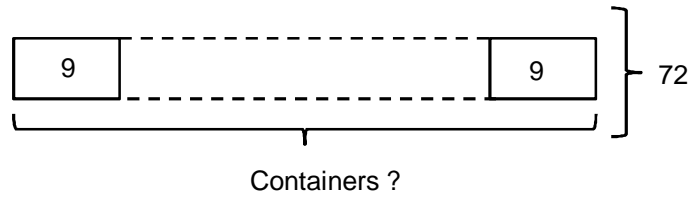
Let's Discuss !



$$63 \div 9 = 7$$

He had 7 boxes.

Question 3b

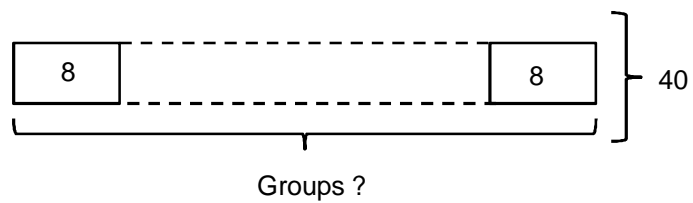


$$72 \div 9 = 8$$

He used 8 containers.

Question 3c

Your Turn !

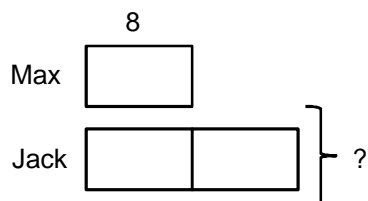


$$40 \div 8 = 5$$

There are 5 groups of pupils.

Question 4a

Let's Discuss!

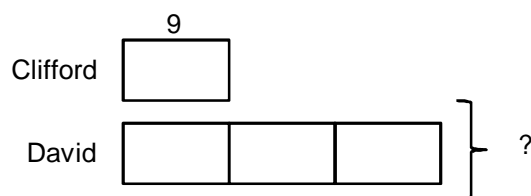


$$8 \times 2 = 16$$

Jack has 16 pencils.

Question 4b

Let's
LEARN

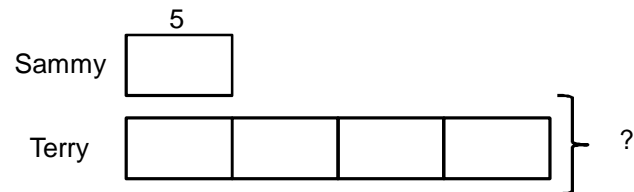


$$9 \times 3 = 27$$

David has 27 goldfish.

Question 4c

Your Turn !

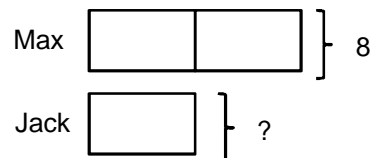


$$5 \times 4 = 20$$

Terry had 20 buns.

Question 5a

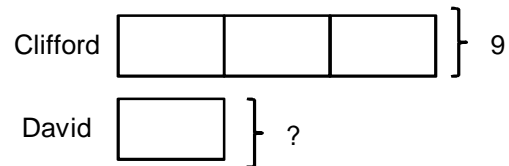
Let's Discuss !



$$8 \div 2 = 4$$

Jack has 4 pencils.

Question 5b

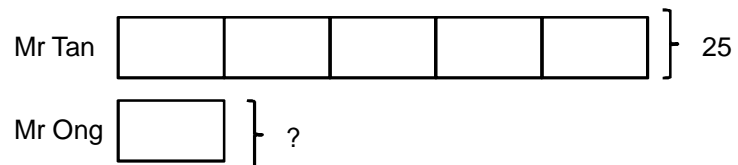


$$9 \div 3 = 3$$

David has 3 goldfish.

Question 5c

Your Turn !

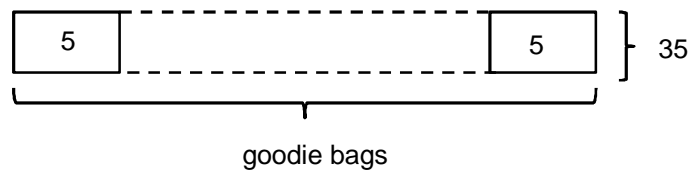


$$25 \div 5 = 5$$

Mr Ong has 5 oranges.

Question 6a

Let's Discuss !

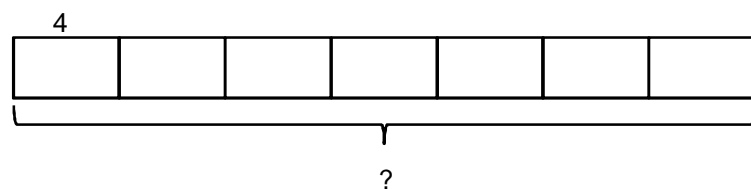


$$35 \div 5 = 7$$

He prepares 7 goodie bags.

Question 6a

Let's Discuss !

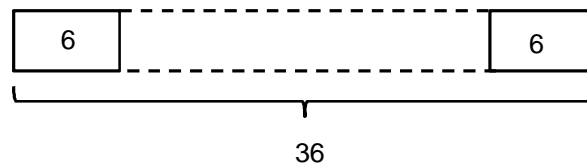


$$4 \times 7 = 28$$

He puts 28 cupcakes into the goodie bags altogether.

Question 6b

Let's Discuss !

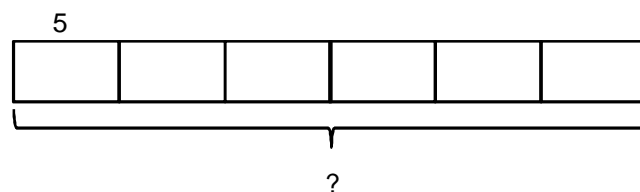


$$36 \div 6 = 6$$

He has 6 containers.

Question 6b

Let's Discuss !

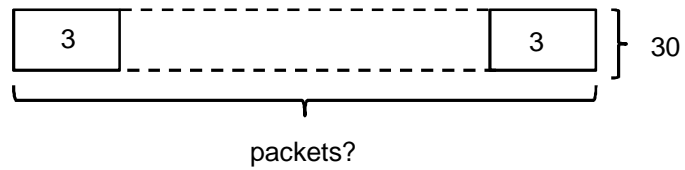


$$6 \times 5 = 30$$

He puts 30 green marbles in the containers altogether.

Question 6c

Let's Discuss !

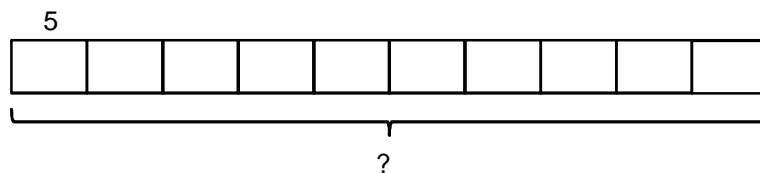


$$30 \div 3 = 10$$

She has 10 packets.

Question 6c

Let's Discuss !

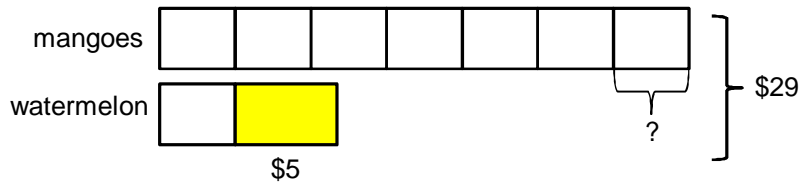


$$10 \times 5 = 50$$

She puts 50 yellow paper clips into the packets altogether.

Question 7a

Let's Discuss !



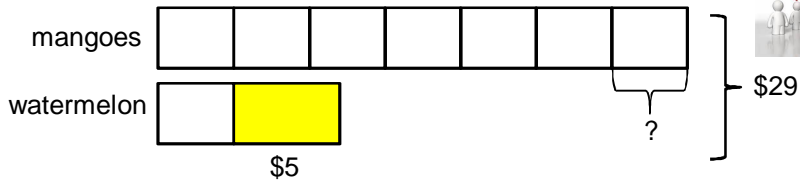
$$\$29 - \$5 = \$24$$

$$\$24 \div 8 = \$3$$

Siti paid \$3 for each mango.

Question 7a

Let's Discuss !



$$\$29 - \$5 = \$24$$

$$\$24 \div 8 = \$3$$

$$\$29 - \$5 = \$24$$

$$8u = \$24$$

$$1u = \$24 \div 8$$

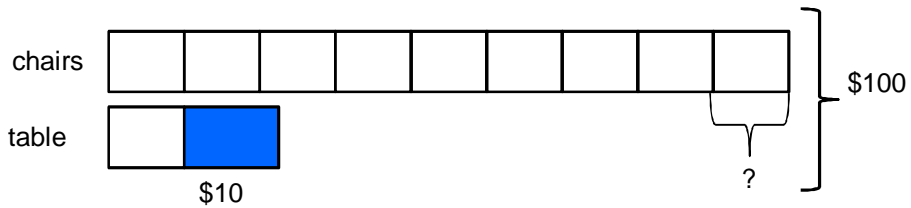
$$= \$3$$

Unitary method

Siti paid \$3 for each mango.

Question 7b

Let's
LEARN



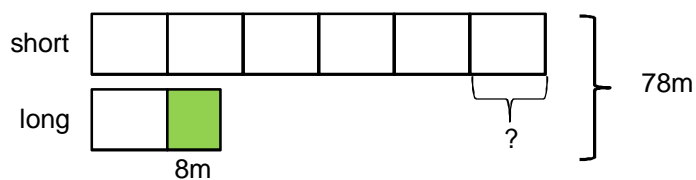
$$\$100 - \$10 = \$90$$

$$\$90 \div 10 = \$9$$

Jalil paid \$9 for each chair.

Question 7c

Your Turn !



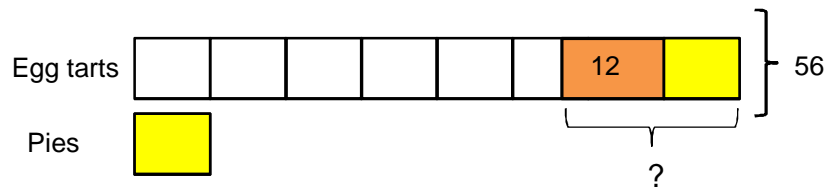
$$78 - 8 = 70$$

$$70 \div 7 = 10$$

Each piece of short ribbon is 10m.

Question 8a

Let's Discuss !



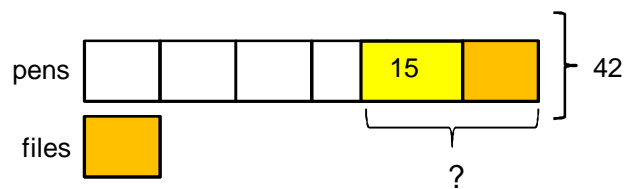
$$56 \div 8 = 7$$

$$7 + 12 = 19$$

He sold 19 egg tarts.

Question 8b

Let's
LEARN



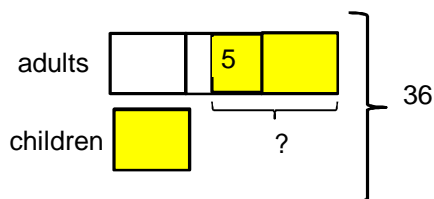
$$42 \div 6 = 7$$

$$7 + 15 = 22$$

He gave away 22 pens.

Question 8c

Your Turn!



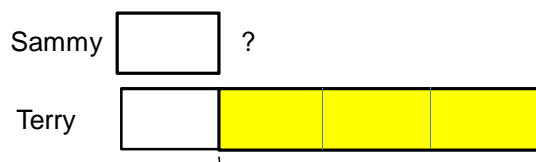
$$36 \div 4 = 9$$

$$9 + 5 = 14$$

14 adults alighted.

Extra Question

Sammy and Terry had the same number of buns at first. After Terry's mother gave him 15 buns, he had 4 times as many buns as Sammy. How many buns did Sammy have?



$$15 \div 3 = 5$$

Sammy had 5 buns.